

Q1.

Exercise I

Rotational Motion - 14-15

Q1.

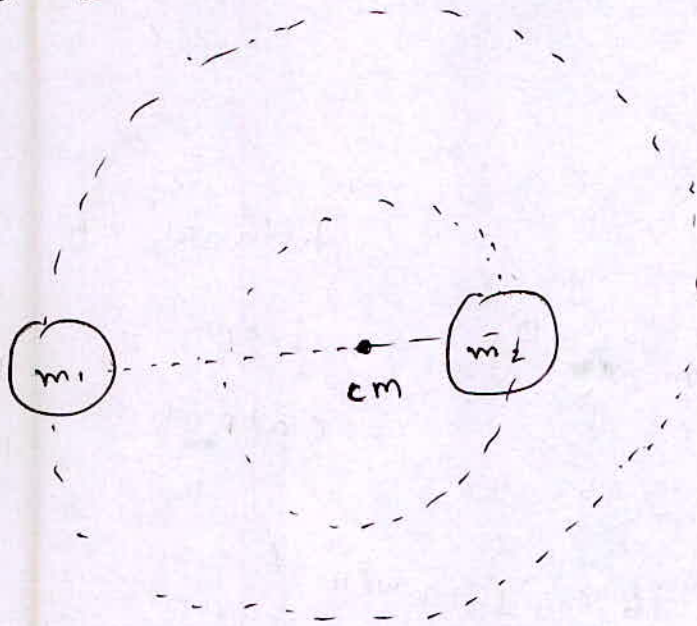
Ans.



$T_2 < T_1 \Rightarrow$  Reading of the balance will be less.

Q2.

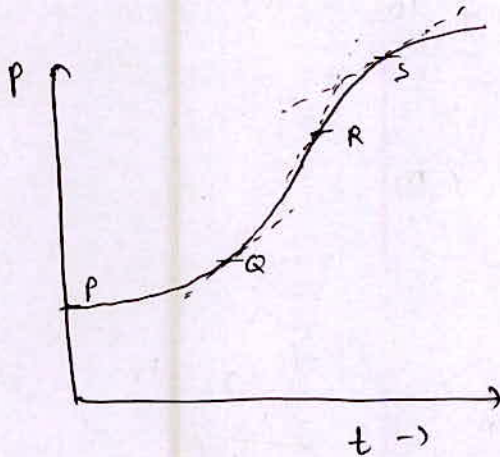
Ans.



revolve around their common center of mass.

Q3.

Ans.



$$F = \frac{d\vec{p}}{dt}$$

at ~~the~~  $F_{max}$ ,  $\frac{d\vec{p}}{dt}$  should be max.

$\left. \frac{d\vec{p}}{dt} \right|_R$  is maximum.

Q 4.

Ans.

$$\frac{d\vec{p}}{dt} = \vec{F}$$

$$\int \vec{F} dt = \int d\vec{p}$$


$$= \vec{p}_2 - \vec{p}_1 = \Delta\vec{p}$$

from graph  $\Rightarrow$  area of F-t graph = 50 Ns

$$\Delta\vec{p} = 50 \text{ N}\cdot\text{s}$$

Q 5.

Ans.



distance of cm

from

$$x_{\text{atom}} = \frac{M_O d}{M_C + M_O}$$


$$= \frac{16 \times 1.12 \times 10^{-8}}{14 + 16}$$

$$= \frac{16}{30} \times 1.12 \times 10^{-8}$$

$$= 0.6 \times 10^{-8} \text{ cm}$$

Q 6.

Ans.



$$x_{\text{cm}} = \frac{\int x dm}{\int dm}$$

$$\begin{aligned}
 x_{cm} &= \frac{\int_0^L x \, dm}{\int_0^L dm} & dm &= (A+Bx) dx \\
 &= \frac{\int_0^L x (A+Bx) dx}{\int_0^L (A+Bx) dx} \\
 &= \frac{\left[ \frac{Ax^2}{2} + \frac{Bx^3}{3} \right]_0^L}{\left[ Ax + \frac{Bx^2}{2} \right]_0^L} \\
 &= \frac{AL^2 + \frac{BL^3}{3}}{AL + \frac{BL^2}{2}} \\
 &= \frac{L(3A + 2BL)}{3(2A + BL)}
 \end{aligned}$$

Q 7.

Ans.

$$\vec{x}_{cm} = \frac{m_1 \vec{x}_1 + m_2 \vec{x}_2 + \dots}{m_1 + m_2 + m_3 + \dots}$$

does not depend upon forces on the particle.

Q 8.

Ans.

$$R_{cm} = \frac{m_1 \vec{x}_1 + m_2 \vec{x}_2}{m_1 + m_2}$$



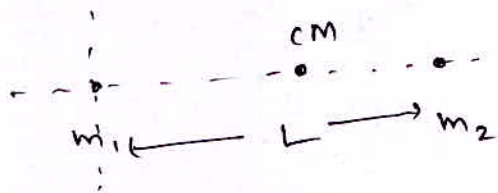
Q 9.

Ans. Center of gravity may lie slightly below the center of mass

~~Q 10.~~~~Ans.~~

Q 10.

Ans.

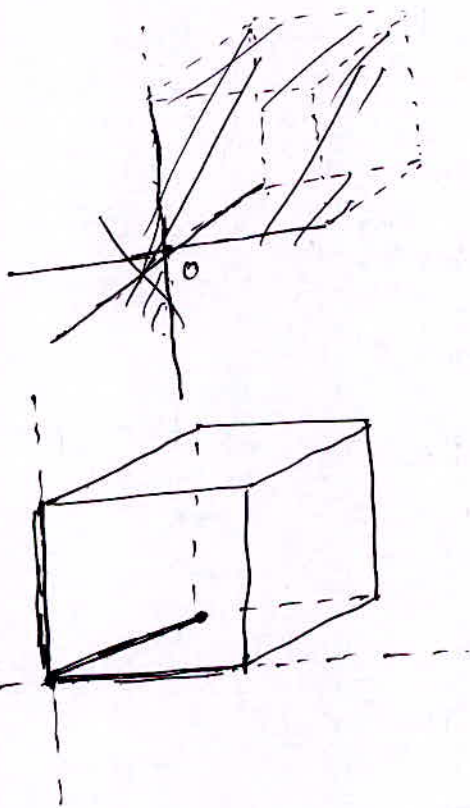


$$d = \frac{m_1 \cdot 0 + m_2 L}{m_1 + m_2}$$

$$d = \frac{m_2 L}{m_1 + m_2}$$

Q 11.

Ans.



$$I_{\text{total}} = I_1 + I_2 + I_3$$

$$= \frac{Ml^2}{3} + \frac{Ml^2}{3} + 0$$

$$= \frac{2}{3} ML^2$$

Q 12.

Ans.

$$I_1 \omega_1 = I_2 \omega_2$$

$$M K_1^2 = I_1$$

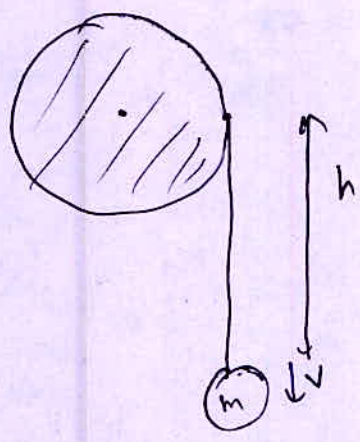
$$M K_2^2 = I_2$$

$$\frac{K_1}{K_2} = \sqrt{\frac{I_1}{I_2}} = \sqrt{\frac{\omega_2}{\omega_1}}$$

Q 13.

Ans.

$$mgh = \frac{1}{2} I \omega^2 + \frac{1}{2} m v^2$$



$$2mgh = \frac{1}{2} \frac{M D^2}{8} \times \frac{4v^2}{D^2} + \frac{1}{2} m v^2$$

$$v^2 = \frac{2mgh}{\left(\frac{M}{2} + m\right)}$$

v is independent of D

Q 14.

Ans.

rolling  $\Rightarrow v = R\omega$

$$\text{K.E. of cylinder} = \frac{1}{2} m v^2 + \frac{1}{2} I \omega^2$$

$$= \frac{1}{2} \times \frac{2I}{R^2} \frac{v^2}{R^2} + \frac{1}{2} I \omega^2$$

$$I = \frac{MR^2}{2}$$

$$= \frac{3}{2} I \omega^2$$

Q 15.

Ans.

$$\begin{aligned}
 \text{K.E.} &= \frac{1}{2} I \omega^2 \\
 &= \frac{1}{2} \times \frac{MR^2}{2} \times \frac{V^2}{R^2} \\
 &= \frac{1}{4} MV^2
 \end{aligned}$$

Q 16.

Ans.

$$\begin{aligned}
 \text{K.E.} &= \frac{1}{2} MV^2 + \frac{1}{2} I \omega^2 \\
 &= \frac{1}{2} MV^2 + \frac{1}{2} MR^2 \frac{V^2}{R^2} \\
 &= MV^2
 \end{aligned}$$

Q 17.

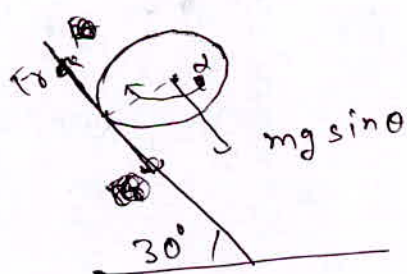
Ans.

$$\begin{aligned}
 \frac{1}{2} m v^2 &= \frac{1}{2} m v'^2 + \frac{1}{2} I \omega^2 \\
 &= \frac{1}{2} m v'^2 + \frac{1}{2} MR^2 \times \frac{v'^2}{R^2} \\
 \frac{1}{2} m v^2 &= M v'^2
 \end{aligned}$$

$$v' = \frac{v}{\sqrt{2}}$$

Q 18.

Ans.



$$a = \frac{g \sin \theta + \frac{F_r}{m}}{3}$$

$$F_r R = I \alpha$$

$$F_r R = \frac{2}{3} MR^2 \alpha$$

$$F_r = \frac{2}{3} MR \alpha$$

$$F_r = \frac{2}{3} m R \alpha$$

$$= \frac{2}{3} m a$$

$$R \alpha = a$$


$$a = g \sin \theta - \frac{2}{3} a$$

$$\frac{5}{3} a = g \sin \theta$$

$$a = \frac{3g}{5} \sin \theta$$

Q 19.

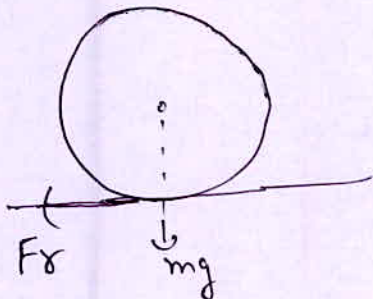
Ans.



$$mgh = \frac{1}{2} mv^2$$

Q 20.

Ans.

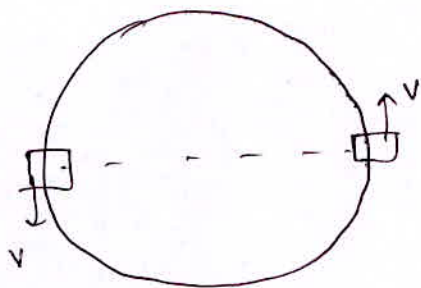


all the forces pass through  
the point of contact.



Q 21.

Ans.



$$|\Delta \vec{P}| = |2 m \vec{v}|$$

Q 22.

Ans.

$$\frac{1}{2} m v^2 = \frac{1}{2} I \omega^2$$

$$\frac{1}{2} m v^2 = \frac{1}{2} I \frac{v^2}{R^2}$$

$$I = m R^2 \Rightarrow \text{Ring.}$$

Q 23.

Ans.

$$\frac{1}{2} m v^2 + \frac{1}{2} I \omega^2 = \frac{1}{2} m \left( \frac{5v}{4} \right)^2$$

$$\frac{1}{2} m v^2 + \frac{1}{2} m k^2 \frac{v^2}{R^2} = \frac{1}{2} m \frac{25}{16} v^2$$

$$\frac{1}{2} m k^2 + 1 + \frac{k^2}{R^2} = \frac{25}{16}$$

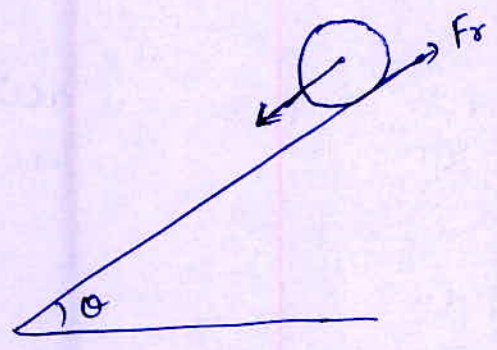
$$\frac{k^2}{R^2} = \frac{9}{16}$$

$$k = \frac{3R}{4}$$



Q 24.

Ans.



$$mg \sin \theta - Fr = ma$$

$$Fr \cdot R = \frac{2}{5} mR^2 \frac{a}{R}$$

$$Fr = \frac{2}{5} ma$$

$$\sin \theta (mg) - \frac{2}{5} ma = ma$$

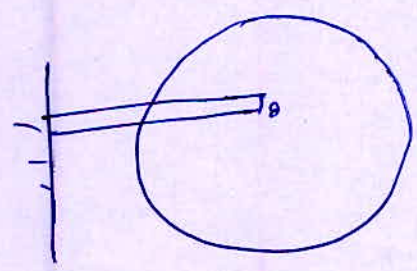
$$a = \frac{5}{7} g \sin \theta$$

$$Fr = \frac{2}{5} \times m \times \frac{5}{7} g \sin \theta = \mu mg \cos \theta$$

$$\mu = \frac{2}{7} \tan \theta$$

Q 25.

Ans.



$$\tau = F \times R = I \alpha$$

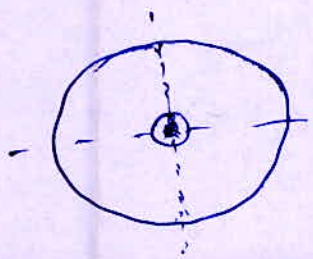
$$\alpha = \frac{F \cdot R}{MR^2/2}$$

$$\alpha = \frac{2F}{MR}$$

$$a_t = R \alpha$$

$$= \frac{2F}{M}$$

Q 26.



$$I_z = mR^2 = I$$

$$I_z = I_x + I_y = 2I_x$$

$$I_x = I_z/2 = I/2$$

Q 28.

Ans.

$$w = a - bt$$

~~$$\frac{dw}{dt} = -b = \frac{w dw}{d\theta}$$~~

$$\frac{dw}{dt} = -b = \frac{w dw}{d\theta}$$

$$\int_0^\theta -b d\theta = \int_a^0 w dw$$

$$-b\theta = \left(0 - \frac{a^2}{2}\right)$$

$$\theta = \frac{a^2}{2b}$$

Q 29.

Ans.

from perpendicular axis theorem

$$I = I_1 + I_2$$

Q 30.

Ans.

$$K.E. = \frac{1}{2} I \omega^2$$

$$I_1 \omega_1 = I_2 \omega_2$$

$$\frac{\omega_2}{\omega_1} = \frac{I_1}{I_2}$$

$$\frac{K.E_1}{K.E_2} = \frac{\frac{1}{2} I_1 \omega_1^2}{\frac{1}{2} I_2 \omega_2^2} = \frac{I_1 I_2^2}{I_2 I_1^2} = \frac{I_2}{I_1}$$

$$\frac{K.E_1}{K.E_2} = \frac{I_2}{I_1} < 1 \Rightarrow K.E_2 > K.E_1$$

Q 31.

Ans.

 $\vec{L}$  is constant

$$L = I \omega$$

I will decrease so  $\omega$  will increase.

Q 32.

Ans.

$$\vec{L} = \vec{r} \times \vec{p}$$

$$= \vec{r} \times m \vec{v}$$

$$= m (\vec{r} \times \vec{v})$$

$$\vec{L} \perp \vec{p}$$

Q 33.

Ans.

$$\tau = \frac{d\vec{L}}{dt}$$

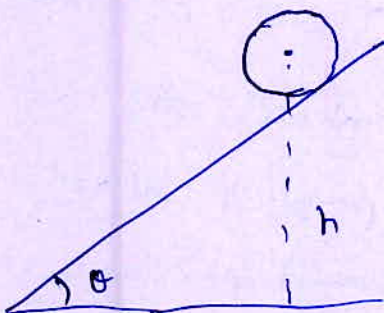
$$\int \tau dt = \int_{A_0}^{4A_0} d\vec{L}$$

$$\tau \times 4 = 3A_0$$

$$\tau = \frac{3A_0}{4}$$

Q 34.

Ans.



$$mgh = \frac{1}{2}mv^2 + \frac{1}{2} \times \frac{mR^2}{2} \frac{v^2}{R^2}$$

$$\frac{4}{3}gh = v^2$$

$$v = \sqrt{\frac{4}{3}gh}$$



Q 35.

Ans.

$$\frac{\frac{1}{2} I \omega_2^2 - \frac{1}{2} I \omega_1^2}{\frac{1}{2} I \omega_1^2} = 3$$

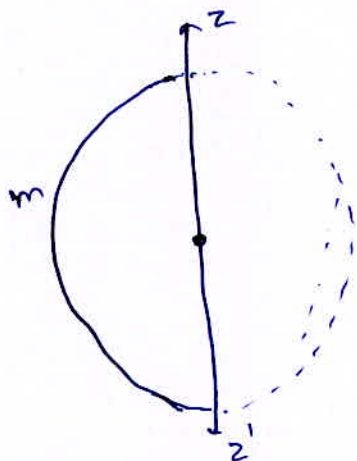
$$\omega_2 = 2\omega_1$$

$$L_2 = I \omega_2 = 2L_1$$

$$\frac{L_2 - L_1}{L_1} \times 100 = 100\%$$

Q 36.

Ans.


 $I_{zz'}$  of Full Ring

$$= \frac{2mR^2}{2}$$

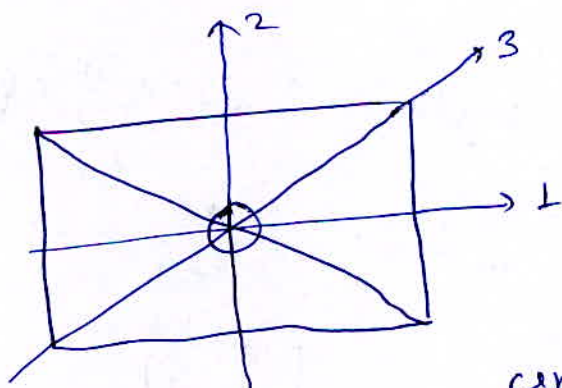
$$R = \frac{l}{\pi}$$

$$I_{zz'}$$
 of Half Ring =  $\frac{2mR^2}{2} \times \frac{1}{2}$

$$= \frac{m l^2}{2\pi^2}$$

Q 37.

Ans.



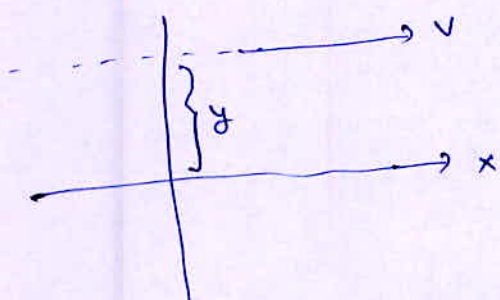
I will be maximum about the axis passing through the center and perpendicular to the plane

Q 38.

Ans. refer Q. 11.

Q 39.

Ans.

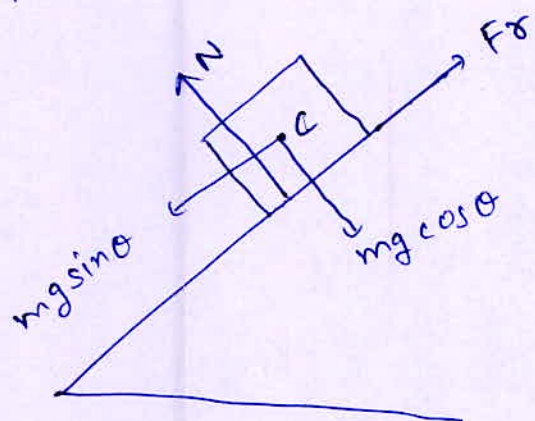


$$|\vec{L}| = |m v y|$$

$\vec{L}$  remains constant

Q 40.

Ans.



$$\sum \vec{Z}_c = 0$$

$$\vec{Z}_N + \vec{Z}_{Fr} = 0$$

$$\textcircled{1} Fr = mg \sin \theta$$

$$\vec{Z}_{Fr} = mg \sin \theta \frac{a}{2}$$

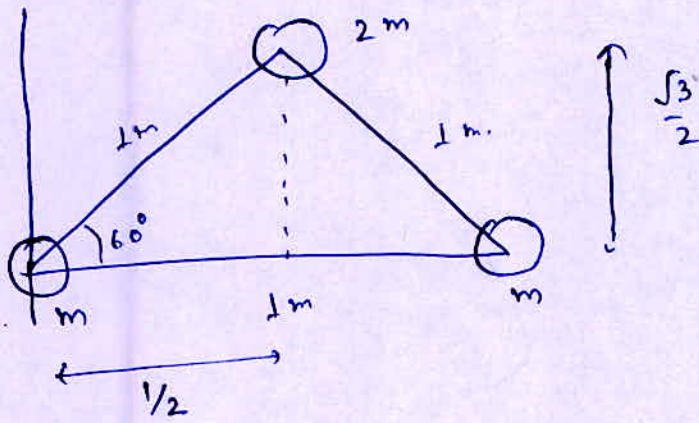
$$\vec{Z}_N = -\frac{a}{2} mg \sin \theta$$





Level II.

Q 1.



$$x_{cm} = \frac{m \cdot 0 + 2m \cdot \frac{1}{2} + m \cdot 1}{4m}$$

$$= 0.50$$

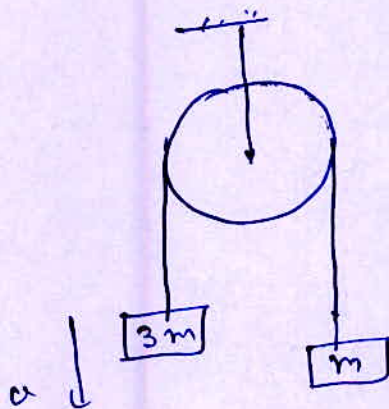
$$y_{cm} = \frac{m \cdot 0 + 2m \cdot \frac{\sqrt{3}}{2} + m \cdot 0}{4m}$$

$$= \frac{\sqrt{3}}{4}$$

$$= (0.5, \sqrt{3}/4)$$

Q 2.

Ans.



$$a = \frac{2mg}{4m} = g/2$$

$$a_{cm} = \frac{3m \cdot g/2 - m \cdot g/2}{4m}$$

$$= g/4 = 2.5 \text{ m/s}^2$$

Q 3.

Ans. Momentum Conservation.

Q 4.

Ans.

(1kg)

(3kg)

there is no external force on the system  
 $\Rightarrow$  velocity of cm will remain constant

Q 5.

Ans.

$$x_{cm} = \frac{60 \times 1 + 40 \times x}{100} = 1$$

$$x = 1$$

$$y_{cm} = \frac{60 \times (-1) + 40 \times y}{100} = 1$$

$$y = \frac{160}{40} = 4$$

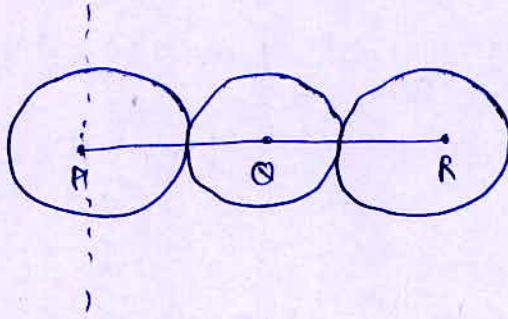
$$z_{cm} = \frac{60 \times 3 + 40 \times z}{100} = 1$$

$$z = -2$$

$\Rightarrow (1, 4, -2)$  Ans.

Q 6.

Ans.

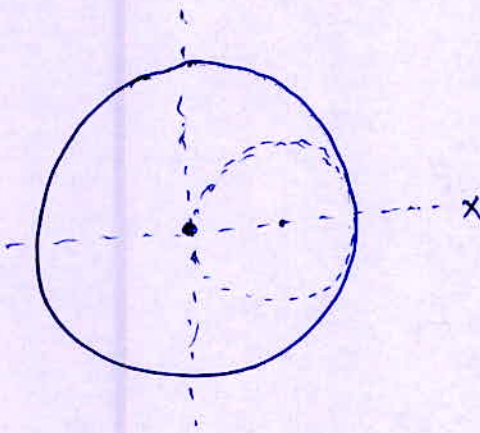


$$d = \frac{1 \times PQ + 1 \times (PQ + QR)}{3}$$

$$= \frac{PQ + PR}{3}$$

Q 7.

Ans.



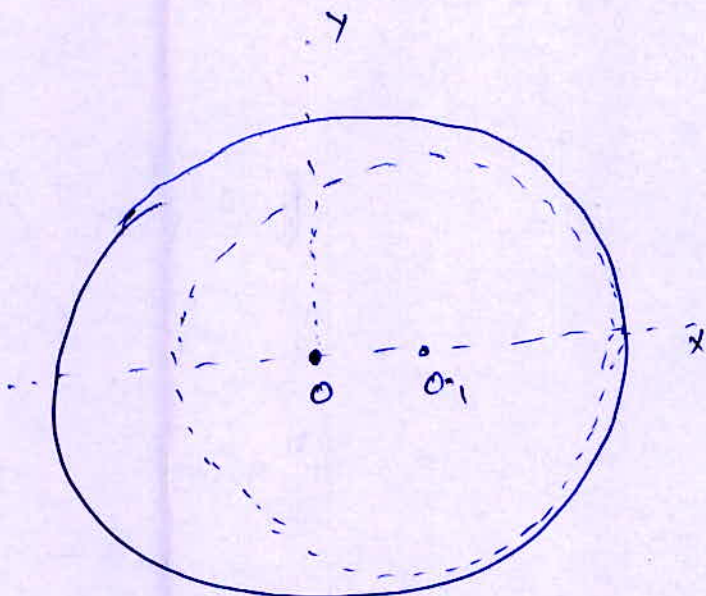
$$x_{cm} = \frac{\sigma \pi R^2 \cdot 0 - \sigma \pi \left(\frac{R}{2}\right)^2 \cdot \frac{R}{2}}{\sigma \pi R^2 - \sigma \pi \left(\frac{R}{2}\right)^2}$$

$$= \frac{-\frac{R}{8}}{1 - \frac{1}{4}}$$

$$= -\frac{R}{6}$$

Q 8.

Ans



$$x_{cm} = \frac{\sigma \pi R^2 \cdot 0 - \sigma \pi \left(\frac{3R}{4}\right)^2 \cdot \frac{R}{4}}{\sigma \pi R^2 - \sigma \pi \left(\frac{3R}{4}\right)^2}$$

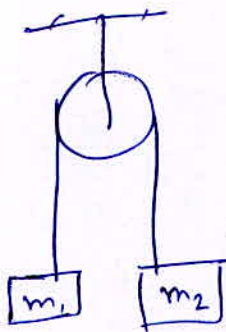
$$= \frac{-\frac{9}{64} R}{1 - \frac{9}{16}}$$

$$= \frac{-9}{4 \times 7} \times 28 = -9 \text{ cm.}$$



Q 9.

Ans.



$$a = \frac{(m_1 - m_2)g}{(m_1 + m_2)}$$

$$a_{cm} = \frac{m_1 \left( \frac{m_1 - m_2}{m_1 + m_2} \right) g - m_2 \left( \frac{m_1 - m_2}{m_1 + m_2} \right) g}{m_1 + m_2}$$

$$= \left( \frac{m_1 - m_2}{m_1 + m_2} \right)^2 g$$

Q 10.

Ans.

$$\vec{F}_{ext} = 0 \quad (\text{on the system})$$

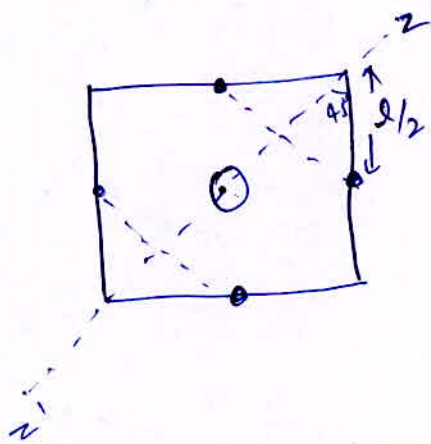
Initial momentum of system is zero.

$$\frac{d\vec{p}}{dt} = 0 \Rightarrow \vec{p}_f = \vec{p}_i = 0$$

$$\Rightarrow \vec{v}_{cm} = 0$$

Q 11.

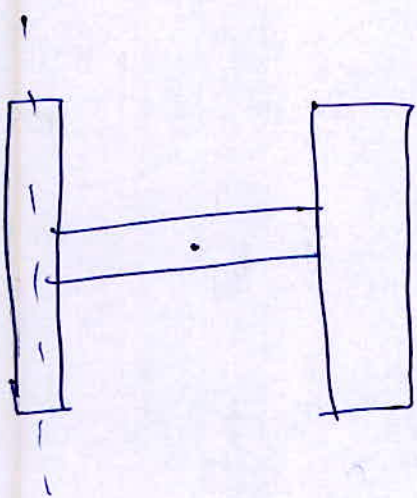
Ans.



$$\begin{aligned} I_{zz} &= 4 \left( \frac{m l^2}{12} + m \left( \frac{l}{2\sqrt{2}} \right)^2 \right) \\ &= \frac{4m a^2}{6} \times \frac{1}{2} \\ &= \frac{2m a^2}{3} \\ &= \frac{2}{3} m l^2 \end{aligned}$$

Q 12.

Ans.

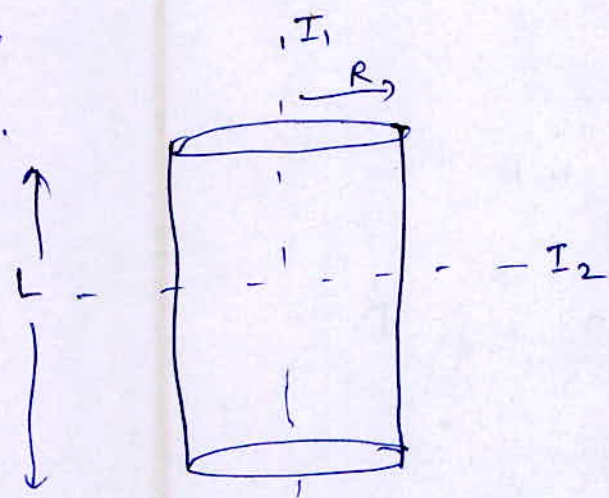


$$I = \frac{m l^2}{3} + \left( \frac{m l^2}{2} \right)$$

$$= \frac{4}{3} m l^2$$

Q 13.

Ans.



$$I_1 = \frac{M R^2}{2}$$

$$I_2 = \left[ \frac{M L^2}{12} + \frac{M R^2}{4} \right]$$

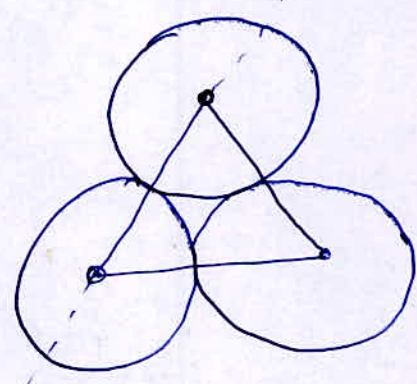
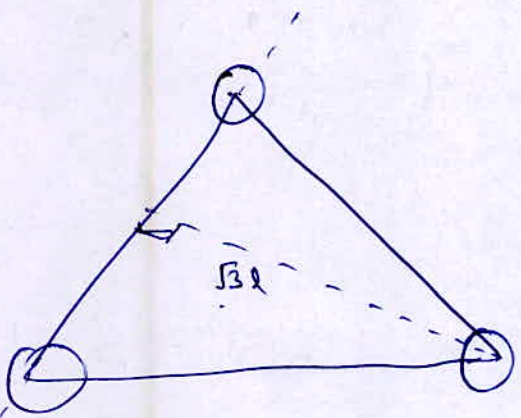
$$I_1 = I_2$$

$$\frac{R^2}{2} = \frac{L^2}{12} + \frac{R^2}{4}$$

$$L = \sqrt{3} R$$

Q 14.

Ans.

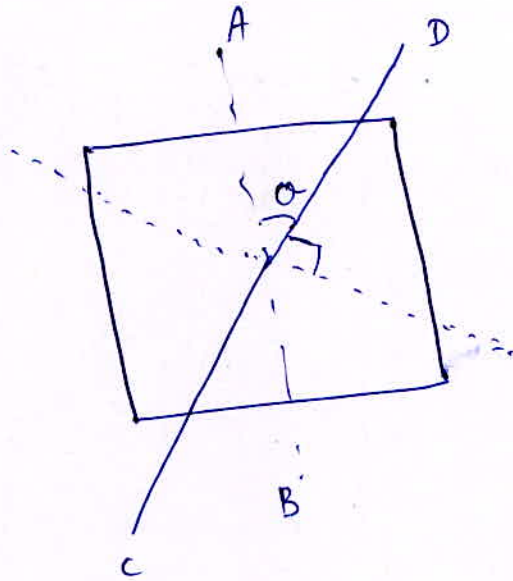


$$I = \frac{2}{5} m l^2 + \frac{2}{5} m l^2 + \left( \frac{2}{5} m l^2 + m (\sqrt{3} l)^2 \right)$$

$$= \frac{21}{5} m l^2$$

Q 15.

Ans.



$$I_{CD} = \left( \frac{Ma^2}{6} \right) \times \frac{1}{2}$$

$$I_{AB} = \frac{Ma^2}{12}$$

$$I_{CD} = I$$

Q 16.

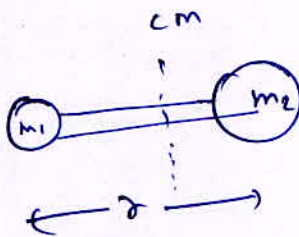
Ans.

$$MK^2 = \frac{2}{5} MR^2 + M(2R)^2$$

$$K = \sqrt{\frac{22}{5}} R$$

Q 17.

Ans.



$$I = m_1 \left( \frac{m_2 r}{m_1 + m_2} \right)^2 + m_2 \left( \frac{m_1 r}{m_1 + m_2} \right)^2$$

$$= \frac{m m_2^2 r^2 (m_1 + m_2)}{(m_1 + m_2)^2}$$

$$= \left( \frac{m_1 m_2}{m_1 + m_2} \right) r^2$$

Q 18.

Ans.

$$\frac{1}{2} MR^2 + \frac{1}{2} M \left( \frac{V_0}{R} \right)^2 =$$

$$\frac{1}{2} mV^2 + \frac{1}{2} MR^2 \times \frac{V^2}{R^2}$$

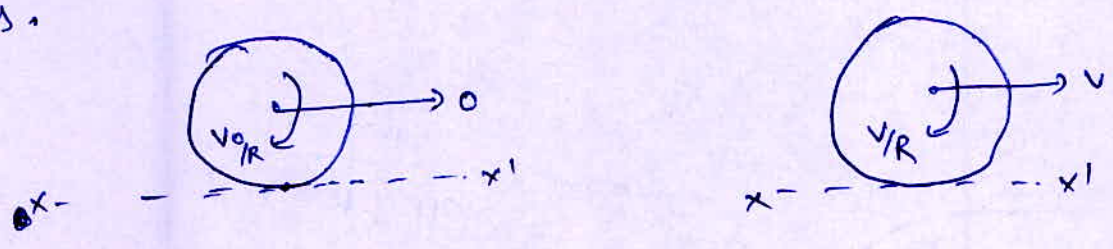
$$\underline{V_0^2} = \underline{2V^2} + \underline{V^2}$$

✓



Q 18.

Ans.



$$(I_1)_{xx'} = (I_2)_{xx'}$$

$$\frac{MR^2}{2} \frac{v_0}{R} = \cancel{M} v R + \frac{\cancel{MR^2}}{2} \frac{v}{R}$$

$$\frac{v_0}{2} = \frac{3}{2} v$$

$$v = v_0/3$$

Q 19.

Ans.

$$\omega = \alpha - \beta t$$

$$\text{at } t = \alpha/\beta \Rightarrow \omega = 0$$

$$\beta \int \omega d\omega = -\beta \int d\theta$$

$$\left[ \frac{\omega^2}{2} \right]_0^\alpha = -\beta \theta$$

$$\theta = \frac{\alpha^2}{2\beta}$$

Q 20.

Ans.



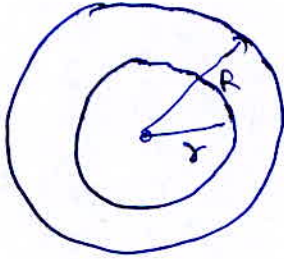
$$I = \frac{MR^2}{4}$$

$$I' = \frac{MR^2}{2} + MR^2 = \frac{3}{2} MR^2$$

$$I' = 6I$$

Q 21.

Ans.



$$\sigma = \frac{M}{\pi (R^2 - r^2)}$$

$$I = \sigma \pi R^2 \frac{R^2}{2} - \sigma \pi r^2 \frac{r^2}{2}$$

$$= \frac{\sigma \pi}{2} (R^4 - r^4)$$

$$= \frac{\sigma \pi}{2} (R^2 - r^2) (R^2 + r^2)$$

$$= \frac{\pi}{2} \times \frac{M}{\pi (R^2 - r^2)} (R^2 - r^2) (R^2 + r^2)$$

$$= \frac{1}{2} M (R^2 + r^2)$$

Q 22.


Ans.

$$\frac{1}{2} I \omega^2 = 360$$

$$I = \frac{360 \times 2}{900} = \frac{72}{90} = 0.8 \text{ kg/m}^2$$

Q 23.

Ans.



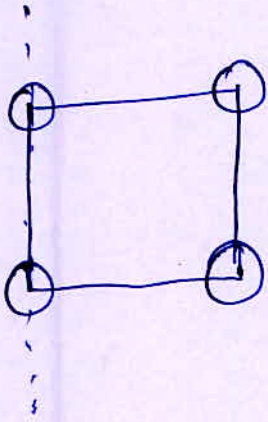
$$I = \frac{2}{3} MR^2 + MR^2$$

$$MR^2 = \frac{5}{3} MR^2$$

$$K = \sqrt{\frac{5}{3}} R$$

Q 24.

Ans.



$$I = \frac{2}{5} m R^2 \times 2 + 2 \left( \frac{2}{5} m R^2 + m a^2 \right)$$

$$= \frac{8}{5} m R^2 + 2 m a^2$$

Q 25.

Ans.

$$I_1 \omega_1 = I_2 \omega_2$$

$$\frac{M L^2}{12} \omega_0 = \left( \frac{M L^2}{12} + \frac{2 m}{M} \frac{L^2}{4} \right) \omega_2$$

$$\frac{\omega_0}{12} = \left( \frac{1}{12} + \frac{1}{2} \frac{m}{M} \right) \omega_2$$

$$\omega_2 = \frac{M \omega_0}{M + 6m}$$


Q 26.

Ans.

$$\vec{\tau}_{\text{ext}} = 0 \Rightarrow \vec{L} \text{ constant}$$

Q 27.

Ans.



$$f_r = 0$$

$$a = g \sin \theta \text{ for all}$$

all will take same time



Q 28.

Ans.

$$E = \frac{1}{2} I \omega^2$$

$$L = I \omega$$

$$L^2 = 2 E I$$

$$L = \sqrt{2 E I}$$

Q 29.

Ans.

$$KE_T = \frac{1}{2} m v^2$$

$$KE_R = \frac{1}{2} I \omega^2 = \frac{1}{2} \frac{2}{5} m R^2 \times \frac{v^2}{R^2}$$

$$\frac{KE_T}{KE_R} = \frac{5}{2}$$

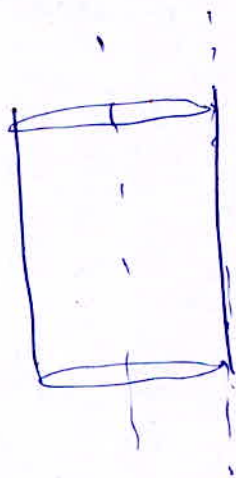
Q 30.

Ans.

decrease moment of Inertia

Q 31.

Ans.



$$\begin{aligned} I &= I_{cm} + MR^2 \\ &= \frac{MR^2}{2} + MR^2 \\ &= \frac{3}{2} MR^2 \end{aligned}$$

Q. 32.

Ans.

$$\omega = \omega_0 - \alpha t$$

$$0 = \frac{900}{60} \times 2\pi - \alpha \cdot 60$$

$$\alpha = \frac{\cancel{2\pi} \times \cancel{900}}{\cancel{3600} \cdot 2} = \frac{\pi}{2} \text{ rad/s}^2$$

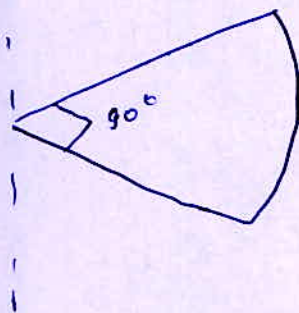
Q 33.

Ans.

$$\omega = \frac{2\pi}{60} = \frac{\pi}{30} \text{ rad/s.}$$

Q 34.

Ans.




$$I = \frac{M}{4} \frac{R^2}{2}$$

$$= \frac{1}{8} MR^2$$

Q 35.

Ans.



$$K.E. \text{ total} = \frac{1}{2} MV^2 + \frac{1}{2} MR^2 \frac{V^2}{R^2}$$

$$= K.E. \text{ trans.} + K.E. \text{ Rot.}$$

$$K.E. \text{ Rot.} = \frac{K.E. \text{ total}}{2}$$

Q 36.

Ans. refer. Q. 22.

Q 37.

Ans.

$$I_P = \frac{1}{2} \rho (2\pi r) r^2$$

$$I_a = \frac{1}{2} \rho (2\pi n r) (nr)^2$$

$$\frac{I_a}{I_P} = 4 = n^3$$

$$n = (4)^{1/3}$$

Q 38.

Ans. refer. Q. 23.

Q 39.

Ans.

$$g = \frac{GM}{R^2}$$

$$\frac{\Delta g}{g} = -2 \frac{\Delta R}{R}$$

$$T = \frac{1}{2} I \omega^2$$

$$= \frac{1}{2} \frac{L^2}{I}$$

$$\frac{\Delta T}{T} = - \frac{\Delta I}{I}$$

$$\frac{\Delta I}{I} = -2 \frac{\Delta R}{R}$$

$g$  ~~will~~ &  $T$  both will  
increase by 4%



Q 40.

Ans.

$$\text{K.E. total} = \frac{1}{2} m v^2 + \frac{1}{2} m k^2 \frac{v^2}{R^2}$$

$$\frac{\frac{1}{2} m k^2 \frac{v^2}{R^2}}{\frac{1}{2} m v^2 + \frac{1}{2} m k^2 \frac{v^2}{R^2}} = \frac{k^2}{k^2 + R^2}$$



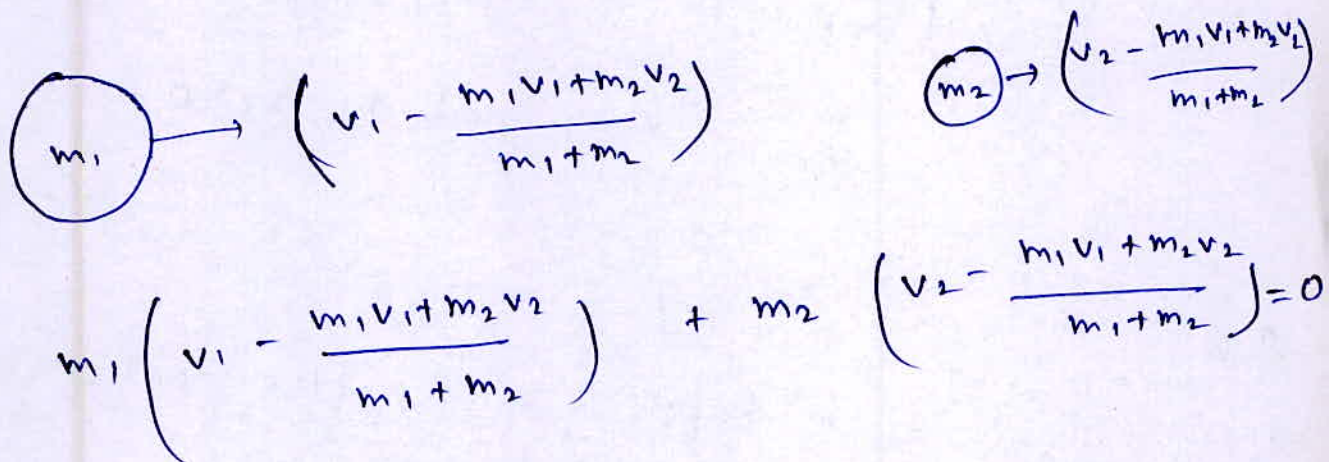
Q 1.

Ans.



$$V_{cm} = \frac{m_1 v_1 + m_2 v_2}{m_1 + m_2}$$

~~in the~~ from the center of mass frame.



$$m_1 \left( v_1 - \frac{m_1 v_1 + m_2 v_2}{m_1 + m_2} \right) + m_2 \left( v_2 - \frac{m_1 v_1 + m_2 v_2}{m_1 + m_2} \right) = 0$$

Q 2.

Ans.

$$\vec{F}_{ext} = 0 \Rightarrow \vec{a}_{cm} = 0$$

$$\vec{V}_{cm} = \text{constant}$$

Q 4.

Ans.

$$m_1 \vec{v}_1 + m_2 \vec{v}_2 + \dots = 0$$

$$K.E. = \frac{1}{2} m_1 v_1^2 + \frac{1}{2} m_2 v_2^2 + \dots \neq 0$$



Q 5.

Ans.

$$\vec{F}_{\text{ext}} = \frac{d\vec{p}}{dt}$$

Q 6.

Ans.

$$\vec{\tau}_{\text{ext}} = 0$$

$\vec{\omega}$  will be constant.

$\vec{v}$  can change.

Q 7.

Ans.

$$\vec{F}_{\text{ext}} = 0$$

$$\vec{a}_{\text{cm}} = 0$$

$\vec{v}_{\text{cm}}$  may not be zero.

Q 8.

Ans.

Just before and after collision momentum is conserved.

Q 9.

Ans.

$\vec{v}_{\text{cm}}$  may not be zero.

Q 10.

Ans.

position of  $\text{cm}$  depends upon shape & size.

Q 12.

Ans.

point about  $\vec{Z}_{\text{ext}} = 0$ 

Q 14.

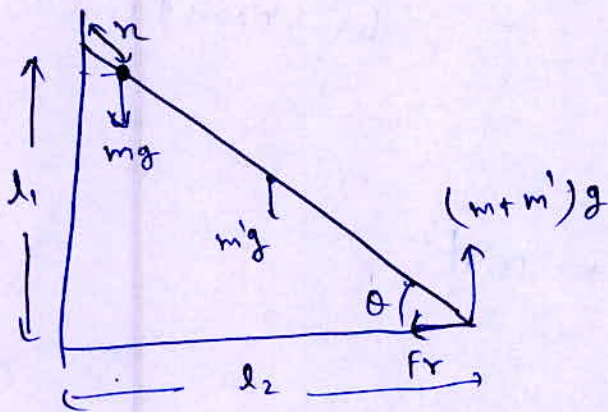
Ans.

I increases,  $\omega$  decreases

$$L = I\omega \Rightarrow \text{constant}$$

Q 15.

Ans.



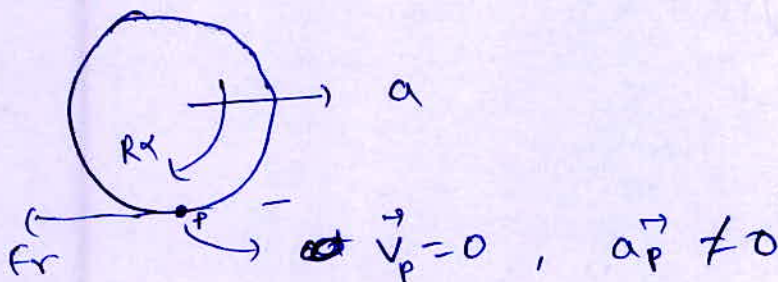
$$Fr \cdot l_1 = (m+m')g l_2 - m'g \frac{l_2}{2} - mg r \cos \theta$$

Fr increases as r decreases

Fr increases as person climbs up.

Q 167

Ans.



$$\vec{v}_P = 0, \vec{a}_P \neq 0$$

Q 19. L.P.

Ans.

$$\vec{z} = \vec{A} \times \vec{L}$$

$$\text{Power} = \vec{z} \cdot \frac{d\vec{\omega}}{dt} = 0$$

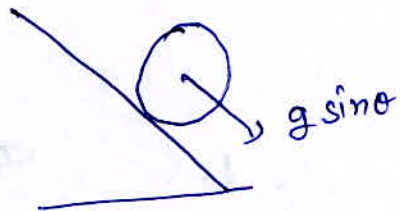
Q 20.

Ans.

I depends on the axis

Q 21.

Ans.


 $\vec{z}$  about CM is zero.

Rotational KE will be constant.

Q 22.

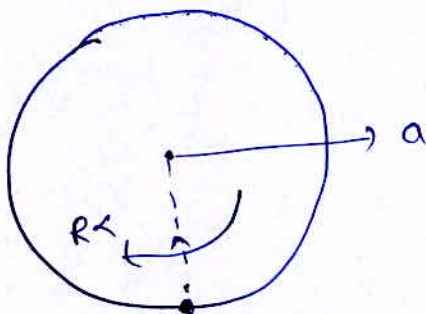
Ans.

$$I = I_{cm} + md^2$$

$$I_{min} = I_{cm}$$

Q 23.

Ans.

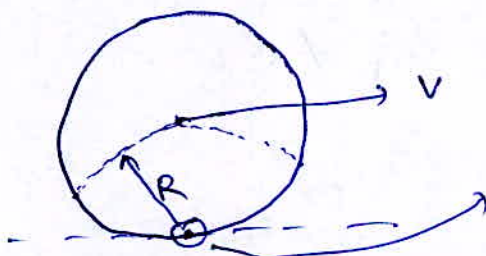


$$a_c = \omega^2 R$$

$$a_t = a - R\alpha = 0$$

Q 24.

Ans.



Instantaneous axis of Rotation



Q 25.

Ans.

$$\frac{d\vec{w}}{dt} = 0 \Rightarrow \alpha = 0 \Rightarrow Fr = 0$$

Q 26.

Ans.

$$I_2 = I_x = I_y \quad (\text{for uniform sphere})$$

Q 27

Ans.

$$\vec{\tau} = \frac{d\vec{L}}{dt}$$

$$\vec{L} = I \vec{\omega}$$

Q 28.

Ans.

$$\vec{L} = \text{constant}$$

$$I_1 \omega_1 = I_2 \omega_2$$

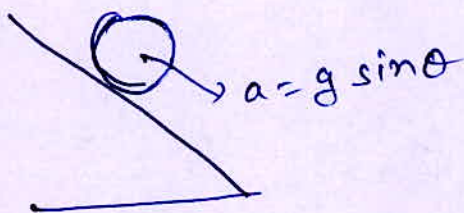
$$\frac{2}{5} MR^2 \omega_1 = \frac{2}{5} m \left(\frac{R}{2}\right)^2 \omega_2$$

$$\omega_2 = 4\omega_1$$

$$T_2 = \frac{T_1}{4} = 6 \text{ hours.}$$

Q 31.

Ans.

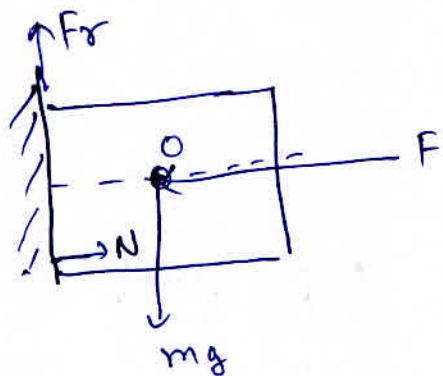


In pure rolling  
Instantaneous speed  
of the point of contact

is zero.  $\Rightarrow$  Power = 0

Q 32.

Ans.



$$\sum \vec{Z}_O = 0$$

$$\vec{Z}_{Fr} + \vec{Z}_N = 0$$

Q 33.

Ans.

$$mgh = \frac{1}{2}mv^2 \rightarrow \text{sliding}$$

$$mgh = \frac{1}{2}mV_2^2 + \frac{1}{2}MK^2 \frac{V_2^2}{R_2} \rightarrow \text{rolling}$$

$$v > v_2$$

Q 34.

Ans.

$$m_1 \vec{v}_1 + m_2 \vec{v}_2 + \dots = 0$$

$$\frac{1}{2}m_1 v_1^2 + \frac{1}{2}m_2 v_2^2 + \dots \neq 0$$

but if


$$\frac{1}{2}m_1 v_1^2 + \frac{1}{2}m_2 v_2^2 + \dots = 0$$

$$v_1 = v_2 = \dots = 0$$

$$m_1 \vec{v}_1 + m_2 \vec{v}_2 + \dots = 0$$

Q 35.

Ans.




$$\vec{Z}_{cm} = 0 \Rightarrow \vec{\omega} = \text{constant}$$

v will decrease ( $\vec{a} = -\vec{g}$ )

Q 36.


Ans.



$$I_1 = I_2 = \frac{MR^2}{2}$$

Q 38.

Ans.



$$mg \sin \theta - Fr = ma$$

$$Fr R = \frac{MR^2}{2} \frac{a}{R}$$

$$Fr = \frac{ma}{2}$$

$$mg \sin \theta - \frac{ma}{2} = ma$$

$$a = \frac{2}{3} g \sin \theta$$

$$Fr = \frac{1}{3} mg \sin \theta$$





# Previous Year's Questions

---

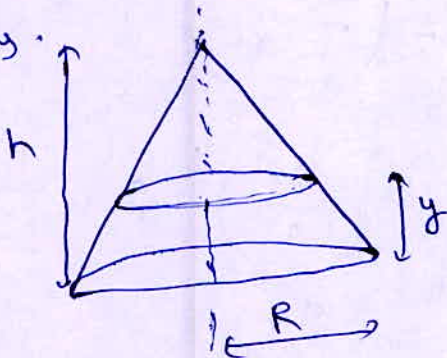
Q1.

Ans.

$$x_{cm} = \frac{m_1 x_1 + m_2 x_2}{m_1 + m_2}$$

Q2.

Ans.



$$\begin{aligned} y_{cm} &= \frac{\int y \, dm}{\int dm} \\ &= \frac{\int y \rho \pi r^2 \, dy}{\int \rho \pi r^2 \, dy} \end{aligned}$$

$$\frac{R}{h} = \frac{r}{h-y}$$

$$r = \frac{R}{h} (h-y)$$

$$y_{cm} = \frac{\int_0^h y \frac{R^2}{h^2} (h-y)^2 \, dy}{\int_0^h \frac{R^2}{h^2} (h-y)^2 \, dy}$$

$$= \frac{\left[ \frac{h^2 y^2}{2} - \frac{2hy^3}{3} + \frac{y^4}{4} \right]_0^h}{\left[ hy^2 - \frac{2hy^2}{2} + \frac{y^3}{3} \right]_0^h}$$

$$= \frac{\left[ \frac{h^4}{2} - \frac{2h^4}{3} + \frac{h^4}{4} \right]}{\left[ h^3 - \frac{2h \cdot h^2}{2} + \frac{h^3}{3} \right]} = \frac{h}{4}$$

Q 3.


Ans.

$$(\hat{i} + 2\hat{j} + 3\hat{k}) = \frac{4\alpha(\hat{i} + 2\hat{j} + 3\hat{k})}{10}$$

$$\alpha = 5/2$$

Q 4.

Ans.



$$a_{cm} = - \left( \frac{m_1 - m_2}{m_1 + m_2} \right)^2 g$$

$$= - \left( \frac{2}{4} \right)^2 g$$

$$= - g/4$$

Q 5.

Ans.



$$6x3 + 4z = 10$$

$$6x3 + 4y = 10$$

$$6x3 + 4z = 10$$

$$x = y = z = -2$$

Q 7

Ans.



$$v_{cm} = \frac{m_1 \vec{v}_1 + m_2 \vec{v}_2}{m_1 + m_2}$$

$$= \frac{-4 + 40}{6}$$

$$= 6 \text{ m/s}$$



Q 8.

Ans.

$$x_{cm} = \frac{0.4 \times 2 + 0.6 \times 7}{1}$$

$$= 5 \text{ m.}$$

Q 10.

Ans.

P &amp; Q

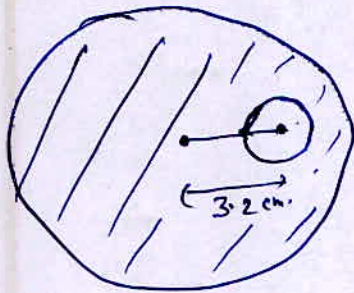
Q 11.

Ans.

$$\vec{F}_{ext} = m \vec{a}_{cm}$$

Q 12.

Ans.



$$x_{cm} = \frac{\sigma \pi R^2 \cdot 0 - \sigma \pi \left(\frac{R}{3}\right)^2 \times 3.2}{\sigma \pi R^2 - \sigma \pi \left(\frac{R}{3}\right)^2}$$

$$= \frac{-\frac{1}{9} \times 3.2}{1 - \frac{1}{9}}$$

$$= -0.4 \text{ cm}$$

Q 13.


Ans.

$$\vec{V}_{cm} = \frac{1 \times 2 \hat{i} + 2 \times \frac{\sqrt{3}}{2} \hat{i} - 2 \times 2 \times \frac{1}{2} \hat{j}}{3}$$

$$= \left( \frac{2 + 2\sqrt{3}}{3} \right) \hat{i} - \frac{2}{3} \hat{j}$$

Q 14.

Ans.



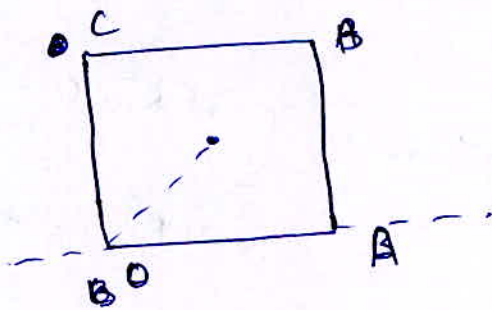
$$f = A x$$

$$x_{cm} = \frac{\int_0^L A x^2 dx}{\int_0^L A x dx}$$

$$x_{cm} = \frac{\left[ \frac{x^3}{3} \right]_0^L}{\left[ \frac{x^2}{2} \right]_0^L} = \frac{2L}{3}$$

Q 15.

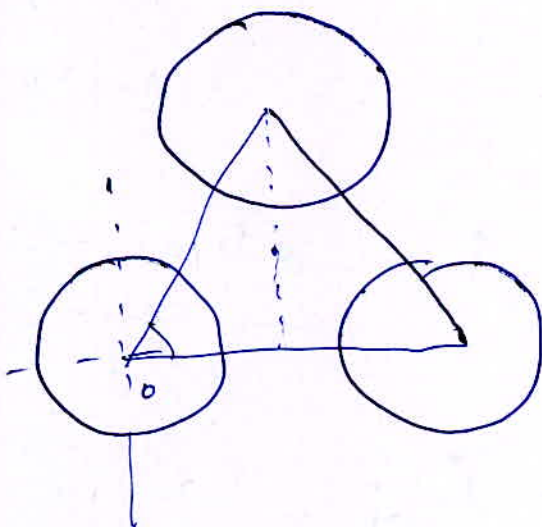
Ans.



$$\vec{r}_{cm} = \frac{1}{2} (\hat{i} + \hat{j})$$

Q 16.

Ans.



$$x_{cm} = \frac{M \cdot 2 + M \cdot 1}{3M}$$

$$= 1$$

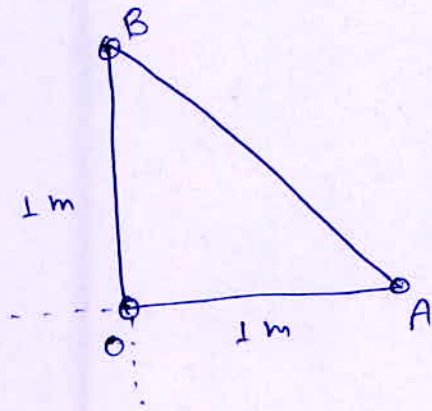
$$y_{cm} = \frac{M \cdot 0 + M \cdot \frac{\sqrt{3}}{2} \cdot 2}{3M}$$

$$= \frac{1}{\sqrt{3}}$$

$$\left( \hat{i} + \frac{\hat{j}}{\sqrt{3}} \right)$$

Q 19

Ans.




$$x_{cm} = \frac{1 \hat{i}}{3}$$

$$y_{cm} = \frac{1 \hat{j}}{3}$$

$$\Rightarrow \left( \frac{\hat{i} + \hat{j}}{3} \right)$$

Q 20.

Ans.



$$x_{cm} = \frac{\int_0^3 n(2+n) dn}{\int_0^3 (2+n) dn}$$

$$x_{cm} = \frac{\left[ n^2 + \frac{n^3}{3} \right]_0^3}{\left[ 2n + \frac{n^2}{2} \right]_0^3}$$

$$= \frac{18}{6 + 9/2}$$

$$= \frac{36}{27} = \frac{12}{7} \text{ m}$$

Q 21.

Ans.

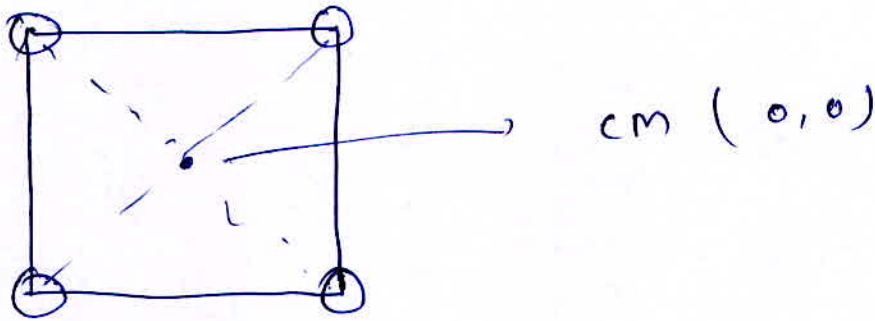
$$\Delta x_{cm} = \frac{m_1 d + m_2 x}{m_1 + m_2} = 0$$

$$x = -\frac{m_1}{m_2} d$$



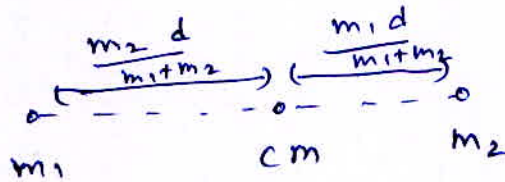
Q 22.

Ans.



Q 23.

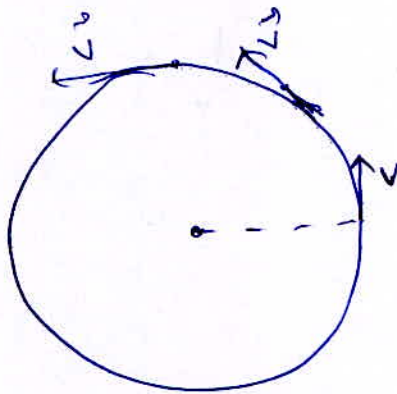
Ans.



### Rotational Variables

Q 24.

Ans.

 $\omega$  constant $|\vec{v}| = \text{constant}$ 

Q 25.

Ans.

$$\begin{aligned} \theta &= 2 \times 2 + \frac{1}{2} \times 3 \times 2^2 \\ &= 4 + 6 = 10 \text{ rad} \end{aligned}$$

Q 26.

Ans.

$$\left(\frac{\omega}{2}\right)^2 = \omega^2 - 2\alpha \times 36 \times 2\pi \Rightarrow \frac{3\omega^2}{4(36 \times 2\pi)} = 2\alpha$$

$$0 = \left(\frac{\omega}{2}\right)^2 - 2\alpha \theta$$

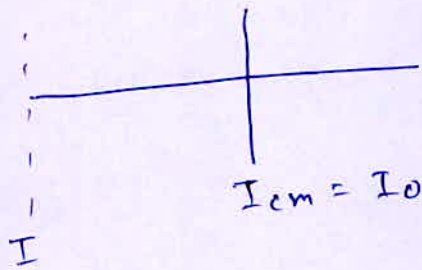
$$\theta = \frac{\omega^2}{8\alpha} = \frac{12 \times 36 \times 2\pi}{8} = 12 \times 2\pi$$

# Moment of Inertia

40

Q 27.

Ans.

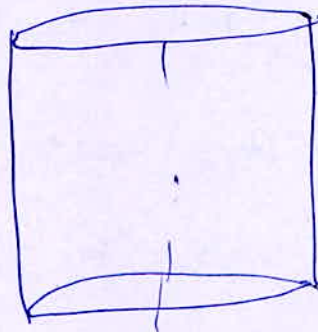


$$I = I_{cm} + m\left(\frac{l}{2}\right)^2 = I_0 + \frac{mL^2}{4}$$

Q 28.

Ans.

$$MR^2$$



Q 29.

Ans.

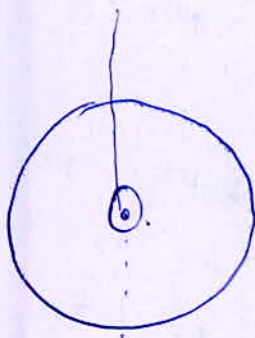
$$Z = I \alpha$$

$$3.14 = I \cdot 4\pi$$

$$I = \frac{1}{4} \text{ kg} \cdot \text{m}^2$$

Q 30.

Ans.



$$I_1 = \frac{MR^2}{2} = 2 \text{ kg} \cdot \text{m}^2$$

$$I_2 = \frac{MR^2}{2} + MR^2 = 3 \times 2 = 6 \text{ kg} \cdot \text{m}^2$$

Q 31.

Ans.  $I = \frac{MR^2}{4} + MR^2 = \frac{5}{4} MR^2$

$$I' = \frac{MR^2}{2} + MR^2 = \frac{3}{2} MR^2$$

$$I' = \frac{6}{5} I$$

Q 32.

Ans.

$$I = \frac{2}{5} MR^2 + MR^2$$

$$= \frac{7}{5} \times 10 \times \frac{1}{4}$$

$$= 3.5 \text{ kg-m}^2$$

Q 33.

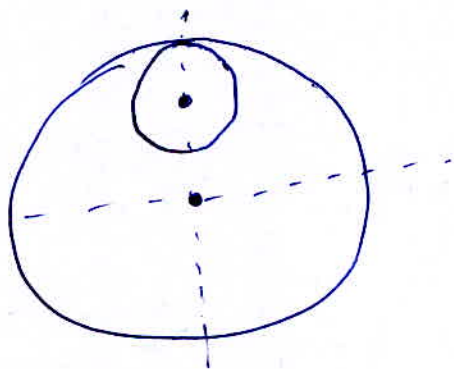
Ans.

$$I = \frac{ML^2}{12} + 2 \times m \left(\frac{l}{2}\right)^2$$

$$= \frac{(M + 6m) L^2}{12}$$

Q 34.

Ans.



$$M' = \frac{M}{9}$$

$$M' = m$$

$$I = \frac{MR^2}{2} - \left( \frac{M'}{2} \left(\frac{R}{3}\right)^2 + M' \left(\frac{2R}{3}\right)^2 \right)$$


$$= R^2 \left( \frac{M}{2} - \frac{M'}{18} - \frac{4M'}{9} \right)$$

$$= R^2 \left( \frac{9m}{2} - \frac{m}{18} - \frac{4m}{9} \right)$$

$$= 4mR^2$$

Q 35.

Ans.



$$I_1 = \frac{MR^2}{2} + MR^2$$

$$MK_1^2 = \frac{3}{2} MR^2$$

$$I_2 = MR^2 + MR^2$$

$$MK_2^2 = 2MR^2$$

$$\frac{K_1}{K_2} = \frac{\sqrt{3}}{2}$$

Q 36.

Ans.

$$MK^2 = \frac{MR^2}{2}$$

$$K^2 = \frac{R^2}{2}$$

$$K = \frac{R}{\sqrt{2}} = 0.7071 R \text{ cm.}$$

Q 37.

Ans.

$$I_1 = MK_1^2 = \frac{MR^2}{2}$$

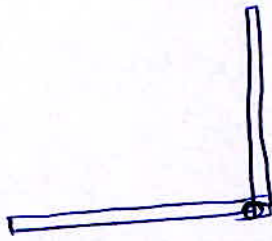
$$I_2 = MK_2^2 = MR^2$$

$$\frac{K_1}{K_2} = \frac{1}{\sqrt{2}}$$



Q 38.

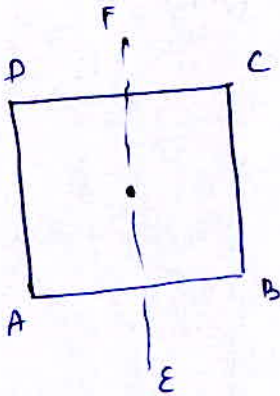
Ans.



$$I = \frac{ML^2}{12}$$

Q 39.

Ans.



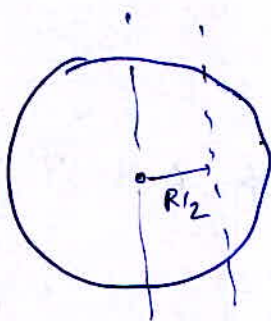
$$I_{EF} = \frac{1}{2} M \frac{a^2}{6}$$

$$I_{AD} = I_{EF} + \frac{Ma^2}{4}$$

$$= \frac{Ma^2}{3} = 4 I_{EF}$$

Q 40.

Ans.



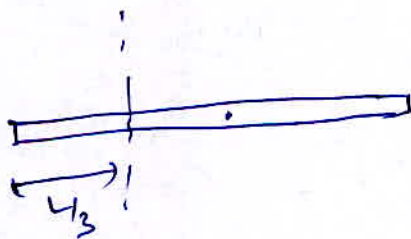
$$I = I_{cm} + M \left(\frac{R}{2}\right)^2$$

$$= \frac{MR^2}{2} + \frac{MR^2}{4}$$

$$= \frac{3}{4} MR^2$$

Q 41.

Ans.



$$I = I_{cm} + M \left(\frac{L}{2} - \frac{L}{3}\right)^2$$

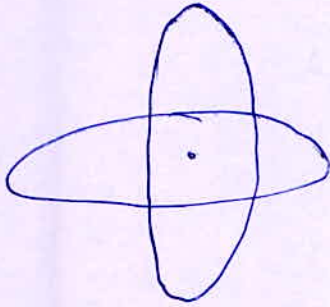
$$MK^2 = \frac{ML^2}{12} + \frac{ML^2}{36}$$

$$= \frac{ML^2}{9}$$

$$K = \frac{L}{3}$$

Q 42.

Ans.



$$I = MR^2 + \frac{MR^2}{2}$$

$$= \frac{3}{2} MR^2$$

Q 43.

Ans.

$$I_1 = \frac{2}{3} MR_1^2$$

$$I_2 = \frac{2}{5} MR_2^2$$

$$\frac{R_1}{R_2} = \sqrt{\frac{\frac{3}{5} I_1}{\frac{I_2}{I_1}}} = \sqrt{\frac{3}{5}}$$

Q 44.

Ans.

$$2I \quad (\text{perpendicular axis thc.})$$

Q 45.

Ans.

$$I = MR^2 = 4 \text{ kg-m}^2$$

$$R = 2 \text{ m.}$$

Q 46.

Ans.

$$K.E_R = \frac{1}{2} I \omega^2 \Rightarrow \omega = 1$$

$$I = 2 K.E_R$$

Q 47.

Ans.

$$I = I_{cm} + MR^2$$

$$= 2 + 2 \times 2^2$$

$$= 10 \text{ kg-m}^2$$

Q 48.

Ans.

$$360 = \frac{1}{2} I \times (20)^2$$

$$I = \frac{360 \times 2}{400} = \frac{18}{10} = 1.8 \text{ kg-m}^2$$

Q 49.

Ans.

$$I_1 = \frac{MR^2}{4} + MR^2 = M \cdot K_1^2$$



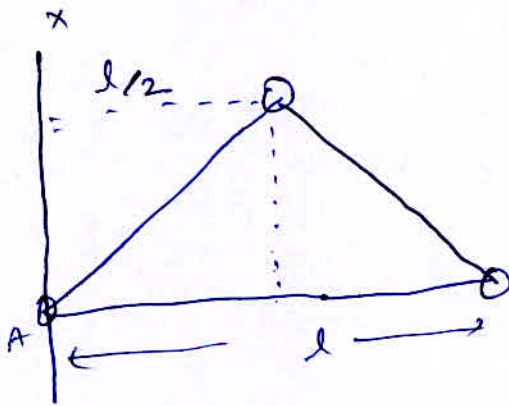
$$I_2 = \frac{MR^2}{2} + MR^2 = M K_2^2$$



$$\frac{K_1}{K_2} = \sqrt{\frac{5}{6}}$$

Q 50.

Ans.




$$I_{Ax} = m \cdot 0^2 + m \left(\frac{l}{2}\right)^2 + ml^2$$

$$= \frac{5}{4} ml^2$$

Q 51.

Ans.



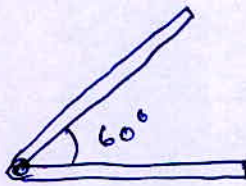
$$I_{xx'} = \frac{MR^2}{2} + 2 \left( \frac{MR^2}{2} + MR^2 \right)$$

$$= \frac{7}{2} MR^2$$



Q 52.

Ans.

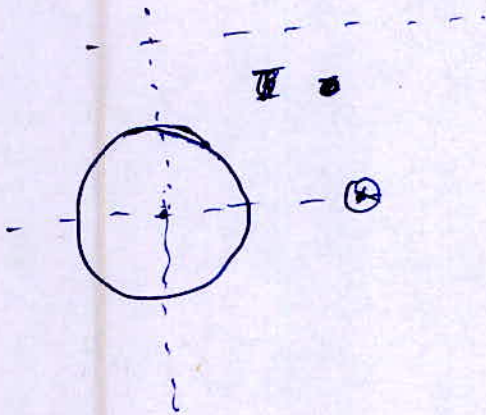


$$I = \frac{M}{2} \left( \frac{l}{2} \right)^2 \times \frac{1}{3} + \frac{M}{2} \left( \frac{l}{2} \right)^2 \times \frac{1}{3}$$

$$= \frac{M l^2}{12}$$

Q 54.

Ans.



$$I_1 = \frac{MR^2}{4} + m(2R)^2$$

$$I_2 = \frac{MR^2}{2} + md^2$$

$$I_1 = I_2$$

$$\frac{17}{4} MR^2 = \frac{MR^2}{2} + md^2$$

$$\frac{15}{4} MR^2 = md^2$$

$$d = \sqrt{\frac{15}{4}} \cdot R = \frac{\sqrt{15}}{2} R$$

Q 55.

Ans.

$$I = 5 \times MR^2$$

$$= 5 \times 2 \times (0.1)^2 = 0.1 \text{ kg-m}^2$$

Q 56.

Ans.

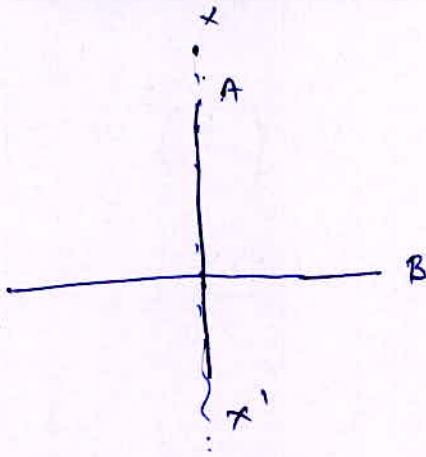
$$MK^2 = \frac{2}{5} MR^2 + M(2R)^2$$

$$K = \sqrt{\frac{22}{5}} R$$



Q 57.

Ans.



$$I_{xx'} = I_A + I_B$$

$$= 0 + \frac{ML^2}{12}$$

Q 58.

Ans.

$$I_H = \frac{2}{3} MR^2$$

$$I_S = \frac{2}{5} MR^2$$

Q 59.

Ans.

$$I = \frac{MR^2}{4} + MR^2 = \frac{5}{4} MR^2$$

$$I_2 = \frac{MR^2}{2} + MR^2 = \frac{3}{2} MR^2$$

$$I_2 = \frac{6}{5} I$$

Q 60.

Ans.

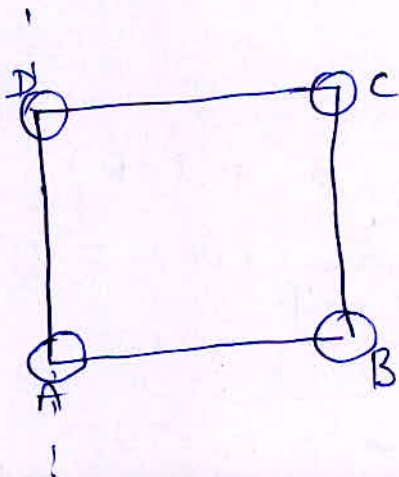
$$I_1 \omega_1 = I_2 \omega_2$$

$$MK_1^2 \omega_1 = MK_2^2 \omega_2$$

$$\frac{K_1}{K_2} = \sqrt{\frac{\omega_2}{\omega_1}}$$

Q 62.

Ans.



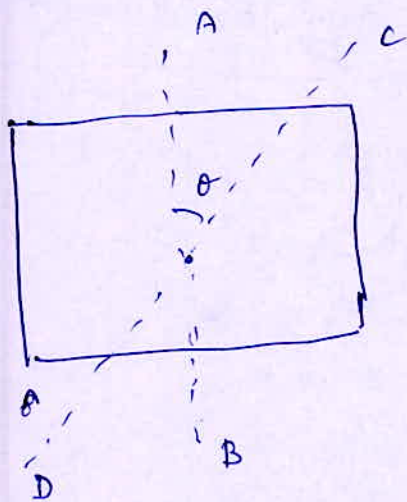
$$I = \frac{2}{3} MR^2 + \left( \frac{2}{3} MR^2 + Mb^2 \right)$$

$$+ \frac{2}{5} MR^2 + \left( \frac{2}{5} MR^2 + Mb^2 \right)$$

$$= \frac{32}{15} MR^2 + 2Mb^2$$

Q 62.

Ans.



$$I_{CD} = I_{AB} = I$$

Q 63.

Ans.

$$L_1 = L_2$$

$$I_1 \omega = I_2 \omega_2$$

$$I_2 = I_1 + I_2$$

$$\omega_2 = \frac{I_1 \omega}{I_1 + I_2}$$

Q 65.

Ans.

$$I_A = \rho \cdot 2\pi r_A \cdot r_A^2$$

$$I_B = \rho \cdot 2\pi r_B \cdot r_B^2$$

$$\frac{I_B}{I_A} = \left(\frac{r_B}{r_A}\right)^3 = 8$$

$$\frac{r_B}{r_A} = 2$$

# Torque, Couple and Angular Momentum

Q 66.

Ans.

$$\theta(t) = 2t^3 - 6t^2$$


$$\frac{d\theta}{dt} = 6t^2 - 12t$$

$$\tau = \frac{d^2\theta}{dt^2} = 12t - 12 = 0$$

$$t = 1 \text{ sec.}$$

Q 67.

Ans.

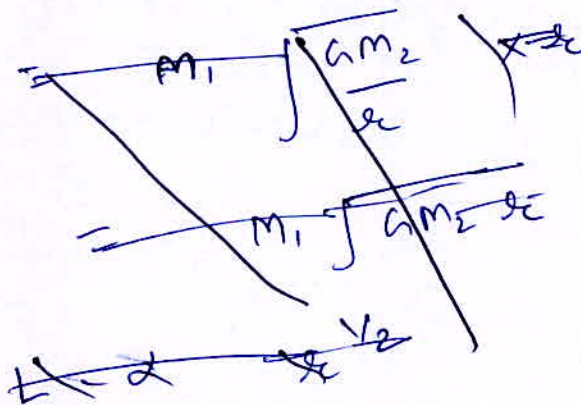


$$\frac{m_1 v^2}{m_2 r} = \frac{G M_1 M_2}{r^2}$$

$$v \propto r^{-1/2}$$

$$L = m_1 v_1 r$$

$$L \propto r^{1/2}$$



Q 68.

Ans.

Angular Momentum



Q 69.

Ans.

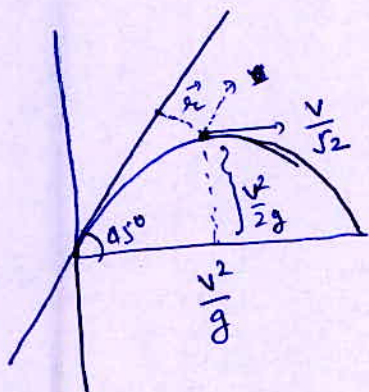
$$\vec{L} = \vec{r} \times \vec{P}$$

$$|\vec{L}| = r p \sin \theta$$

will be max. when  $\theta = 90^\circ$ 

Q 70.

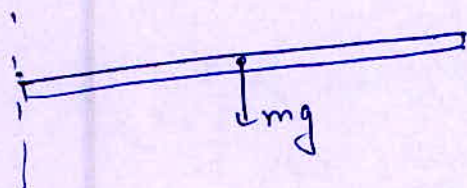
Ans.



$$\begin{aligned} \vec{L} &= \vec{r} \times \vec{P} \\ &= \left( \frac{\frac{v^2}{g} - \frac{v^2}{2g}}{\sqrt{2}} \right) \times m \frac{v}{\sqrt{2}} \sin 45^\circ \\ &= \frac{m v^2}{4\sqrt{2} g} \end{aligned}$$

Q 71.

Ans.



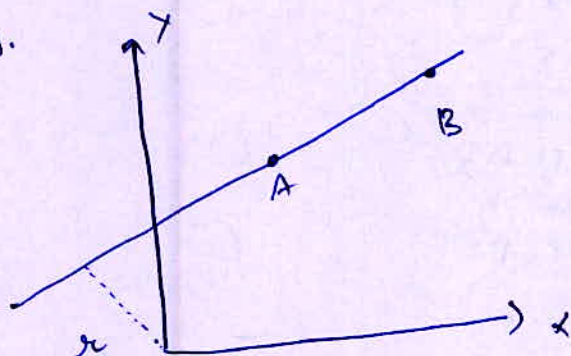
$$\vec{\tau} = I \alpha$$

$$mg \frac{l}{2} = \frac{m l^2}{3} \alpha$$

$$\alpha = \frac{3g}{2l}$$

Q 72.

Ans.



$$\vec{L}_A = m v \vec{r}$$

$$\vec{L}_B = m v \vec{r}$$



Q 73.

Ans.

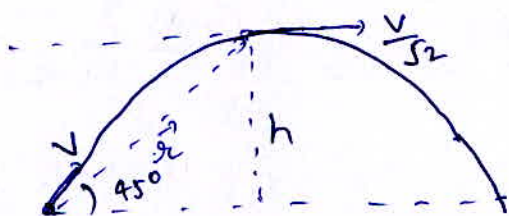
$$\begin{aligned}\vec{L} &= I \alpha \\ &= \frac{m d (2d)^2}{12} \times \frac{\omega}{t} \\ &= \frac{m d^2 \omega}{3 t}\end{aligned}$$

$$\omega = 0 + \alpha t$$

$$\alpha = \frac{\omega}{t}$$

Q 74.

Ans.



$$\begin{aligned}\vec{L} &= m (\vec{r} \times \vec{v}) \\ &= m \cdot \frac{v}{\sqrt{2}} \underbrace{r \sin \theta}_{h} \\ &= \frac{m v h}{\sqrt{2}}\end{aligned}$$

Q 75.

Ans.

$$K.E. = \frac{1}{2} I_1 \omega_1^2 = \frac{1}{2} I_2 \omega_2^2$$

$$0 = \omega_1^2 - 2\alpha (2\pi n)$$

$$\omega_1^2 = \frac{2 \cdot Z}{I_1} 2\pi n$$

$$\omega_2^2 = \frac{2 \cdot Z}{I_2} (2\pi n_2)$$

$$I_2 \omega_2^2 = 2Z 2\pi n_2 \quad - (1)$$

$$I_1 \omega_1^2 = 2Z 2\pi n \quad - (2)$$

①/②

$$\frac{n_2}{n} = 1$$

$$n_2 = n$$

Q 76.

Ans.

$$\omega^2 = \omega_0^2 - \alpha t$$

$$0 = \frac{60 \times 2\pi}{60} - \alpha \times 60$$

$$\alpha = \frac{2\pi}{60}$$

$$\tau = I \alpha$$

$$= 2 \times \frac{2\pi}{60} = \frac{\pi}{15} \text{ N-m}$$

Q 77.

Ans.



$$F_{net} = \frac{M}{L} dm \omega^2$$

$$Z = \int_0^L \frac{M}{L} dm \omega^2$$

$$= \frac{M}{L} \omega^2 \frac{L^2}{2} = \frac{ML\omega^2}{2}$$

Q 78.

Ans.

$$\omega_2 = 2\omega$$

$$K.E._1 = \frac{L^2}{2I}$$

$$K.E._2 = \frac{L_2^2}{2I_2} = \frac{L^2}{4I}$$

$$K.E._2 = \frac{1}{2} I_2 (2\omega)^2 = \frac{1}{2} \times \frac{1}{2} I_1 \omega^2$$

$$I_2 = \frac{I_1}{8}$$

$$\frac{L_2^2}{2 \times \frac{I_1}{8}} = \frac{L^2}{4I_1} \Rightarrow L_2^2 = \frac{L^2}{4}$$

Q 78.

Ans.

$$I_1 \omega_1 = I_2 \omega_2$$

$$m R_1^2 \omega_1 = m \left( \frac{R_1}{n} \right)^2 \omega_2$$

$$\omega_2 = n^2 \omega_1$$

Q 80.

Ans.

$$I_1 \omega_1 = I_2 \omega_2$$

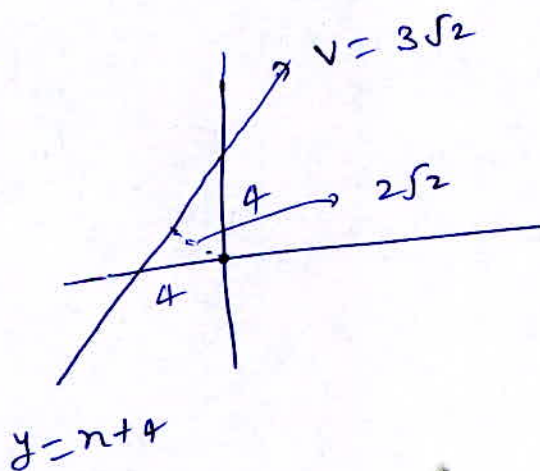
$$\frac{m_1 R^2}{2} \omega_1 = \left( \frac{m_1 R^2}{2} + m_2 R^2 \right) \omega$$

$$\omega = \frac{m_1 \omega_1}{m_1 + 2m_2} = \frac{2}{2.5} \times 30$$

$$= 24 \text{ rad./s.}$$

Q 81.

Ans.



$$\begin{aligned} \vec{L} &= m v r \sin 45^\circ \\ &= 5 \times 3\sqrt{2} \times 4 \times \frac{1}{\sqrt{2}} \\ &= 60 \end{aligned}$$

Q 82.

Ans.

$$\vec{r} = 8\hat{i} - 4\hat{j}$$

$$\vec{v} = 8\hat{i} + 4\hat{j}$$

$$\begin{aligned} \vec{L} &= \vec{r} \times \vec{p} = (8\hat{i} - 4\hat{j}) \times (8\hat{i} + 4\hat{j}) \\ &= 32\hat{k} + 32\hat{k} \\ &= 64\hat{k} \end{aligned}$$



Q 83.

Ans.

$$I_1 \omega_1 = I_2 \omega_2$$

$I$  increases  $\Rightarrow \omega$  decreases

Q 84.

Ans.

$$Z = \frac{dL}{dt}$$

Q 85.

Ans.

$$Z = I \alpha$$

$$T R = \frac{M R^2}{2} \alpha$$

$$\alpha = \frac{2T}{MR}$$

Q 86.

Ans.

$$Z = \frac{\Delta L}{\Delta T} = \frac{3A_0}{4}$$

Q 87.

Ans.

$$\vec{Z} = \frac{d\vec{L}}{dt} = 0 \Rightarrow \vec{L} \text{ constant}$$

Q 88.

Ans.

$$I_1 \omega_1 = I_2 \omega_2 = \text{Constant}$$

$$\frac{\Delta I}{I} = - \frac{\Delta \omega}{\omega}$$

$$\frac{\frac{M(R + \alpha \Delta T)^2}{2} - \frac{MR^2}{2}}{MR^2/2} = - \frac{\Delta \omega}{\omega}$$



$$\frac{\Delta \omega}{\omega} = 2 \alpha \Delta T$$

$$\Delta \omega = 2 \omega \alpha \Delta T$$

Q 89.

Ans.

$$I \omega = L$$

$\Rightarrow$  T Double  $\Rightarrow$   $\omega$  half

L will be half

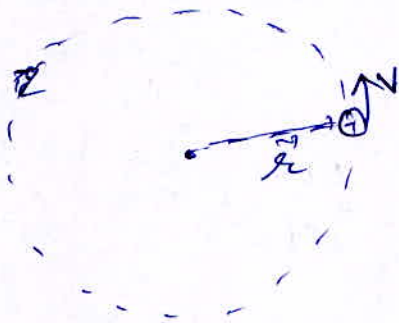
Q 90.

Ans.

$$\vec{\tau} = \frac{d\vec{L}}{dt}$$

Q 90.3.

Ans.



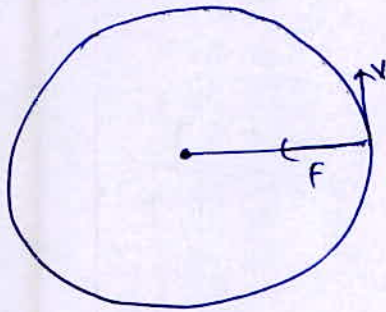
$$\vec{L} = m (\vec{r} \times \vec{v})$$

$\Rightarrow$  constant

# Rotational Energy and Power

Q 94.


Ans.



$$\text{Power} = \vec{F} \cdot \vec{V} = 0$$

Q 95.

Ans.



$$K.E.R = \frac{1}{2} \times \frac{2}{5} mR^2 \frac{V^2}{R^2}$$

$$K.E_{\text{Total}} = \frac{1}{2} mV^2 + \frac{1}{2} \times \frac{2}{5} mR^2 \frac{V^2}{R^2}$$

$$\frac{K.E_{\text{Rotational}}}{K.E_{\text{Total}}} = \frac{2/5}{1 + 2/5} = \frac{2}{7}$$

Q 96.

Ans.

$$K.E_{\text{Total}} = \frac{1}{2} I \omega^2 + \frac{1}{2} mV^2$$

$$= \frac{1}{2} m \frac{R^2}{2} \omega^2 + \frac{1}{2} m R^2 \omega^2$$

$$= \frac{3}{4} mR^2 \omega^2$$

$$= \frac{3}{4} \times 4.8 \times 1 \times (40)^2 \times \pi^2$$

$$= 1440 \pi^2 \text{ J}$$

Q 97.

Ans.

$$K.E. = \frac{1}{2} I \omega^2 \quad \omega = \frac{1}{2} \frac{L^2}{I}$$

L remains constant but I decreases

Q 98.

Ans.

$$K.E.R = \frac{1}{2} I \omega^2$$

$$K.E.T = \frac{1}{2} m v^2 = \frac{1}{2} m R^2 \omega^2$$

$$\frac{K.E.R}{K.E.T} = \frac{4}{10} = \frac{I}{m R^2}$$

$$I = \frac{2}{5} m R^2 \Rightarrow \text{solid ball}$$

Q 99.

Ans.

$$\frac{1}{2} I \omega^2 = 8$$

$$\frac{1}{2} \times \frac{2}{5} \times R^2 \times \omega^2 = 8$$

$$\omega = 4$$

$$L = I \omega = 10 \times 4 = 40$$

Q 100.

Ans.

$$\frac{K.E.R}{K.E.Total} = \frac{\frac{1}{2} m K^2 \omega^2}{\frac{1}{2} m K^2 \omega^2 + \frac{1}{2} m R^2 \omega^2}$$

$$= \frac{K^2}{K^2 + R^2}$$

Q 101.

Ans.

$$\frac{1}{2} \times \frac{MR^2}{2} \times \omega^2 = 4$$

$$\frac{1}{2} \times \frac{MR^2}{2} (\omega R)^2 = 4$$

$$(\omega R)^2 = 8$$

$$\omega R = 2\sqrt{2} = v$$

Q 102.

Ans.

$$K.E. = \frac{1}{2} m v^2 + \frac{1}{2} \times \frac{2}{5} m R^2 \frac{v^2}{R^2}$$

$$= \frac{1}{2} m v^2 (1 + 2/5)$$

$$= \frac{7}{10} \times 2 \times \left(\frac{1}{2}\right)^2$$

$$= 0.35 \text{ J}$$

Q 103.

Ans.

$$\frac{1}{2} I_1 \omega_1^2 = \frac{1}{2} I_2 \omega_2^2$$

$$\frac{1}{2} I_1 \omega_1^2 = \frac{1}{2} 2I \omega_2^2$$

$$\left(\frac{\omega_1}{\omega_2}\right)^2 = 2$$

$$\frac{\omega_1}{\omega_2} = \sqrt{2}$$



Q 104.

Ans.

$$mgh \leq \frac{1}{2} m v^2 + \frac{1}{2} \times \frac{2}{5} m R^2 \frac{v^2}{R^2}$$

$$gh \leq \frac{7}{10} v^2$$

$$v \geq \sqrt{\frac{10}{7} gh}$$

Q 106.

Ans.

$$I_A \omega_A = I_B \omega_B$$

$$K_A = \frac{1}{2} I_A \omega_A^2$$

$$K_B = \frac{1}{2} I_B \omega_B^2$$


$$\frac{K_A}{K_B} = \left( \frac{\omega_A}{\omega_B} \right)^2 \times \frac{I_A}{I_B} = \frac{I_B^2}{I_A^2} \times \frac{I_A}{I_B}$$

$$\frac{K_A}{K_B} = \frac{I_B}{I_A} < 1$$

$$K_B > K_A$$

Q 107.


Ans.



it ~~won't stop~~  
will never stop.

Q 108.

Ans.



$$mg \sin \theta - Fr = ma$$

$$Fr = I \frac{a}{R^2}$$

$$mg \sin \theta = m \left( \frac{I}{mR^2} + 1 \right) a$$

$$a = \frac{mg \sin \theta R^2}{mR^2 + I}$$

$$I_s < I_{\text{hollow}}$$

Q 109.


Ans.

$$\begin{aligned} \text{K.E.} &= \frac{1}{2} m v^2 + \frac{1}{2} m R^2 \frac{v^2}{R^2} \\ &= m v^2 \end{aligned}$$

## Rolling Motion

Q 110.

Ans.


 $v_{\max}$  without friction

$$v_{\max} = \sqrt{Rg \tan \theta}$$

Q 111.

Ans.

$$\mu = \frac{m_1 m_2}{m_1 + m_2} = \frac{2m}{3}$$

Q 112.

Ans.

$$a = \frac{g \sin \theta}{R^2 + I/m}$$

a solid sphere = 
$$\frac{g \sin \theta}{R^2 \left(1 + \frac{2}{5}\right)}$$

a disc = 
$$\frac{g \sin \theta}{R^2 \left(1 + \frac{1}{2}\right)}$$

$$s = \frac{1}{2} a t^2$$

$$t \propto a^{-1/2}$$

$$\frac{t_{\text{solid}}}{t_{\text{disc}}} = \left( \frac{a_{\text{disc}}}{a_{\text{solid}}} \right)^{1/2} = \left( \frac{7/5}{3/2} \right)^{1/2}$$

$$= \sqrt{\frac{14}{15}}$$

Q 113.

Ans.

$$mgh = \frac{1}{2} mv^2 \rightarrow \text{sliding}$$

$$mgh = \frac{1}{2} mv^2 + \frac{1}{2} I \frac{v^2}{R^2} \rightarrow \text{Rolling}$$

$$v_{\text{rolling}} < v_{\text{sliding}}$$

Q 114.


Ans.

$$a = \frac{g \sin \theta R^2}{R^2 + \frac{I}{m}}$$

$\frac{I}{m}$  is same for both.

Q 115.

Ans.



$$a = \frac{g \sin \theta}{1 + \frac{I}{mR^2}}$$

$$mg \sin \theta - Fr = ma$$

$$Fr R = I \frac{a}{R}$$

$$Fr = \frac{I a}{R^2}$$

$$mg \sin \theta = ma + \frac{I a}{R^2}$$


$$a = \frac{mg \sin \theta}{m \left(1 + \frac{I}{mR^2}\right)} = \frac{g \sin \theta}{\left(1 + \frac{1}{2}\right)}$$

$$a = \frac{g \times \frac{\sqrt{3}}{2}}{\frac{3}{2}} = \frac{g}{\sqrt{3}}$$



Q 116.

Ans.



$$mg \sin \theta - f_r = ma$$

$$R. f_r = \frac{mR^2}{2} \frac{a}{R}$$

$$f_r = \frac{ma}{2}$$

$$a = \frac{2}{3} g \sin \theta$$

$$f_r = \frac{mg \sin \theta}{3} \leq \mu_s mg \cos \theta$$

$$\tan \theta \leq 3 \mu_s$$

Q 117.

Ans.

$$mgh = \frac{1}{2} m v^2 + \frac{1}{2} \times \frac{mR^2}{2} \times \omega^2$$

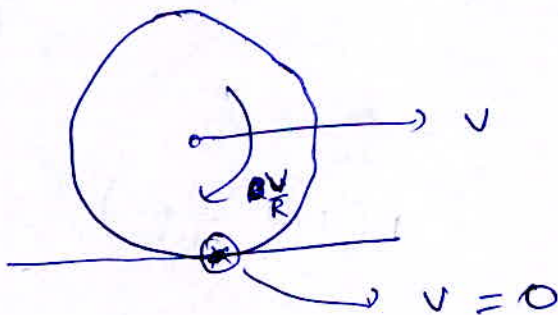
$$\cancel{m}gh = \frac{3}{4} \cancel{m}R^2 \omega^2$$

$$R^2 = \frac{4}{3} \frac{gh}{\omega^2} = \frac{4}{3} \times \frac{30}{8}$$

$$R = \sqrt{5} \text{ m.}$$

Q ~~118~~ 119.

Ans.



Q 120.

Ans.

$$mgh = \frac{1}{2}mv^2 + \frac{1}{2} \times \frac{2}{5} mR^2 \frac{v^2}{R^2}$$

$$mgh = \frac{7}{10}mv^2$$

$$h = \frac{7}{10} \frac{v^2}{g}$$

Q 121.

Ans.

$$I_1 \omega_1 + I_2 \omega_2 = 0$$

$$\omega_2 = - \frac{I_1}{I_2} \omega_1$$

~~$$R(\omega_1 + \omega_2) = 0$$~~

$$\omega_1 = \frac{1}{2}$$

$$\omega_2 = - \frac{50 \times R^2}{200} \times \frac{1}{2}$$

$$= - \frac{50 \times 4}{200} \times \frac{1}{2}$$

$$= - \frac{1}{2}$$

$$\omega_{\text{relative}} = \omega_1 - \omega_2 = \frac{1}{2} + \frac{1}{2} = 1$$

$$T = \frac{2\pi}{\omega_{\text{relative}}} = \frac{2\pi}{1} = 2\pi \text{ sec.}$$

